


Transport I Spy and Count Checklist Answers

Count the number of each type of transport and write the numeral in the box.


11

helicopters




4

trains



7

cars



1

ambulance



3

bikes




5

aeroplanes



20

scooters



2

buses



10

boats

